

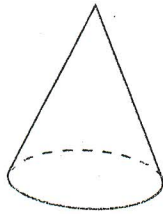
Clear Plastic Volume Set Lab Activity

Name _____

Period _____

Find the volume of the following six 3-dimensional pieces. Fill each piece full of water as close to the top as possible. **Try to avoid spilling and of the water you are displacing into the shapes or into the 1000ml graduated cylinder.** Keep all of your lab equipment on the laboratory tray so water can stay on the tray instead of the lab table or the floor!

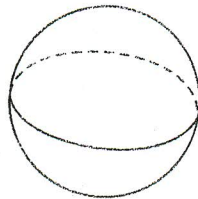
Cone



CONE

Volume

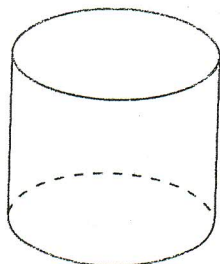
Sphere



SPHERE

Volume

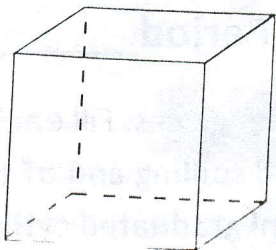
Cylinder



CYLINDER

Volume

Name _____



Cube

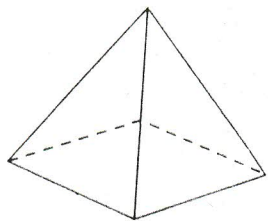
CUBE

Volume



CONE

Square Pyramid

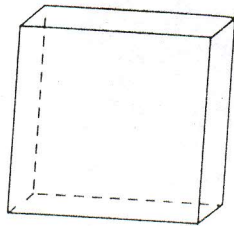


SQUARE PYRAMID

Volume



Rectangular prism



RECTANGULAR PRISM

Volume

